

Comparing numbers (1)



I Which is the greater number in each pair?

Tick your answers.

a)


b)

c)


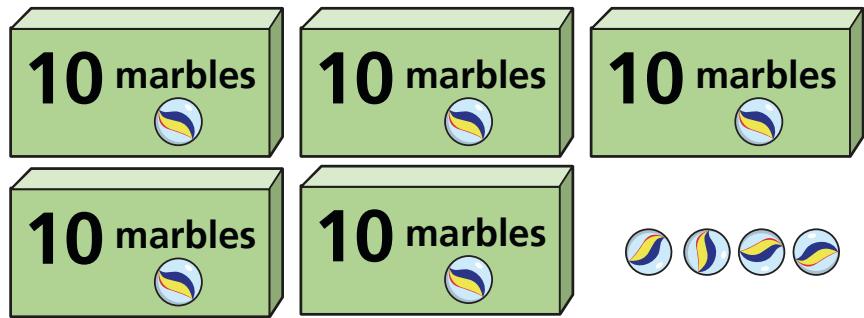
How do you know?




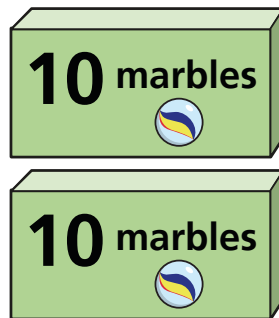
2 Mo and Kim each have some marbles.



Mo



Kim



a) How many marbles does Mo have?

54

b) How many marbles does Kim have?

27

c) Who has more marbles? Mo

How do you know?





3 Use base 10 *Various answers*

a) Make a number greater than 50

What number did you make?

b) Make a number less than 90

What number did you make?

c) Make a number greater than 80
but less than 100

What number did you make?

Talk about your answers.



4 Write **greater than** or **less than** to complete the sentences.

a) 72 is less than 83

b) 100 is greater than 99

c) 65 is greater than 56